

WORKSHEET

Name: _____


Standard: _____ Age: _____

Date: _____



Circle the no. that is equal to the no. of objects in each set.

(1) How many bees are there?




11	12	13	14	15	16	17	18	19	20
----	----	----	----	----	----	----	----	----	----

(2) How many butterflies are there?



11	12	13	14	15	16	17	18	19	20
----	----	----	----	----	----	----	----	----	----

(3) How many lions are there?




11	12	13	14	15	16	17	18	19	20
----	----	----	----	----	----	----	----	----	----

(4) How many fishes are there?




11	12	13	14	15	16	17	18	19	20
----	----	----	----	----	----	----	----	----	----

(5) How many dogs are there?



11	12	13	14	15	16	17	18	19	20
----	----	----	----	----	----	----	----	----	----

(6) How many elephants are there?



11	12	13	14	15	16	17	18	19	20
----	----	----	----	----	----	----	----	----	----

WORKSHEET

Name: _____

Standard: _____ Age: _____

Date: _____



(7) How many bikes are there?




11	12	13	14	15	16	17	18	19	20
----	----	----	----	----	----	----	----	----	----

(8) How many houses are there?



11	12	13	14	15	16	17	18	19	20
----	----	----	----	----	----	----	----	----	----

(9) How many candles are there?



11	12	13	14	15	16	17	18	19	20
----	----	----	----	----	----	----	----	----	----

(10) How many crayons are there?



11	12	13	14	15	16	17	18	19	20
----	----	----	----	----	----	----	----	----	----

(11) How many ice-creams are there?



11	12	13	14	15	16	17	18	19	20
----	----	----	----	----	----	----	----	----	----

(12) How many bananas are there?



11	12	13	14	15	16	17	18	19	20
----	----	----	----	----	----	----	----	----	----